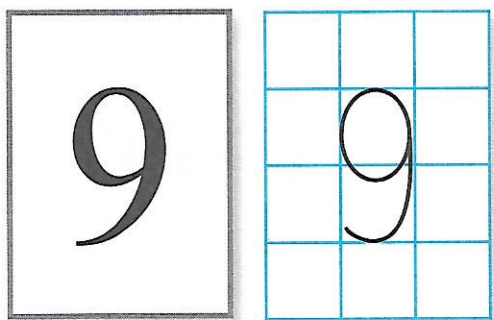
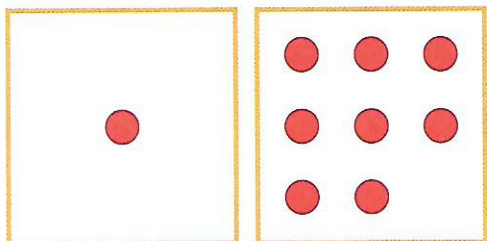



- Narysuj tyle figur, aby ich liczba odpowiadała umieszczonej cyfrze.




- Policz figury każdego rodzaju. Wpisz do okienek obok figur odpowiednie liczby.




$$\boxed{1} + \boxed{8} = \boxed{9}$$



$$\boxed{} + \boxed{} = \boxed{}$$



$$\boxed{} + \boxed{} = \boxed{}$$



$$\boxed{} + \boxed{} = \boxed{}$$

- Połącz linią tabliczki z tak samo ułożonymi cyframi.

0	1	2
3	5	7
9	8	4

0	1	2
3	5	9
7	8	6

0	1	2
3	5	6
9	8	4

0	1	2
3	5	9
7	8	6

0	1	2
3	4	5
6	7	8